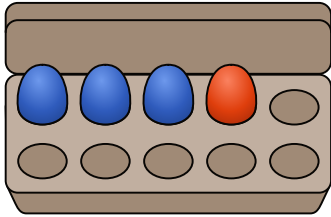
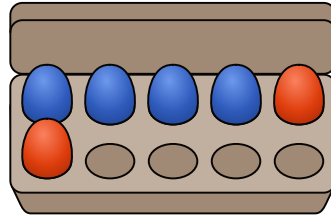


Kinder wollen lernen: Umkehraufgaben

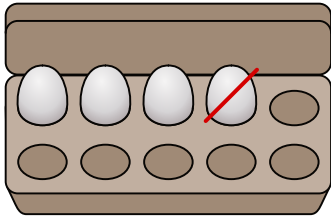
Finde die Umkehraufgabe.



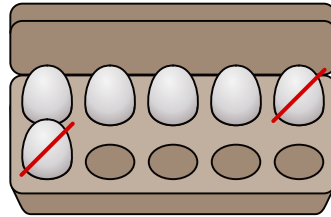
$$3 + 1 = 4$$



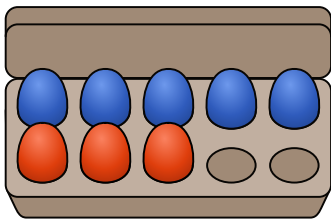
$$_ + _ = _$$



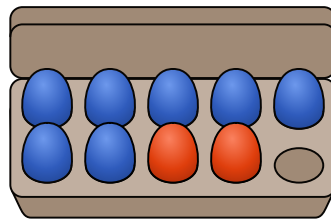
$$4 - 1 = 3$$



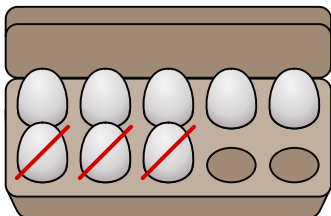
$$_ - _ = _$$



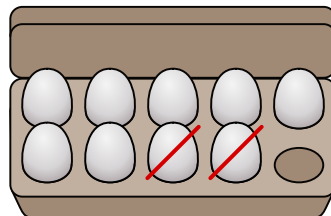
$$_ + _ = _$$



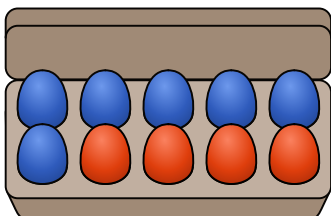
$$_ + _ = _$$



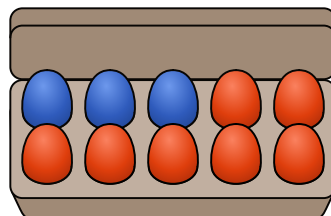
$$_ - _ = _$$



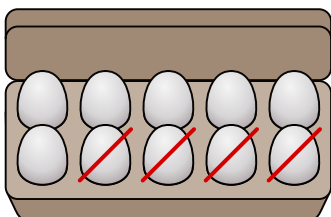
$$_ - _ = _$$



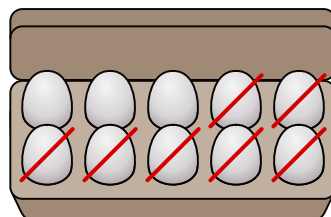
$$_ + _ = _$$



$$_ + _ = _$$



$$_ - _ = _$$



$$_ - _ = _$$