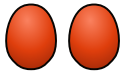
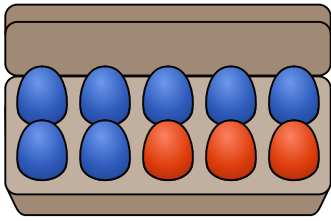
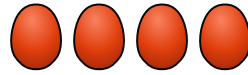
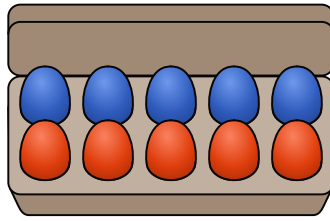


# Kinder wollen lernen: Der Zehnerübergang

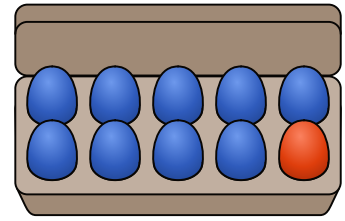
Ergänze die Rechenaufgaben.



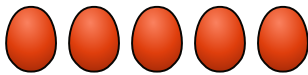
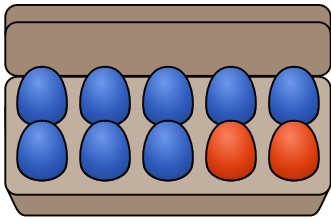
$$7 + 5 = 12$$



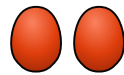
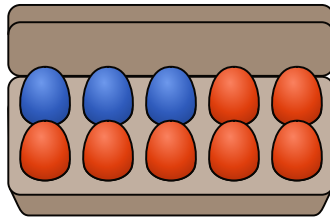
$$\underline{\quad} + \underline{\quad} = \underline{\quad}$$



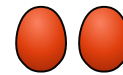
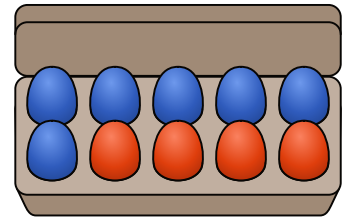
$$\underline{\quad} + \underline{\quad} = \underline{\quad}$$



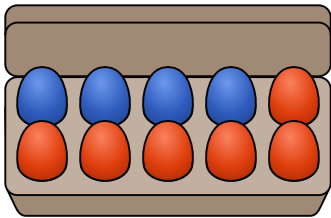
$$\underline{\quad} + \underline{\quad} = \underline{\quad}$$



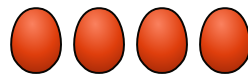
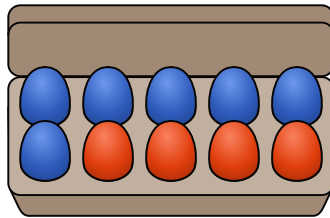
$$\underline{\quad} + \underline{\quad} = \underline{\quad}$$



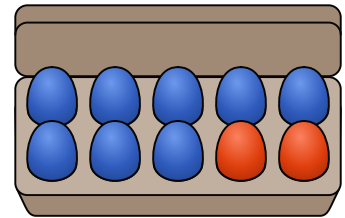
$$\underline{\quad} + \underline{\quad} = \underline{\quad}$$



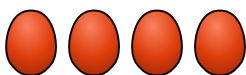
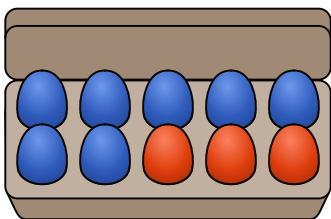
$$\underline{\quad} + \underline{\quad} = \underline{\quad}$$



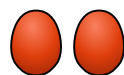
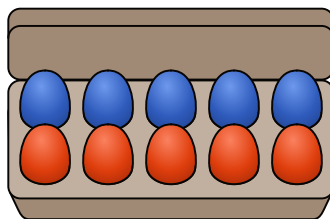
$$\underline{\quad} + \underline{\quad} = \underline{\quad}$$



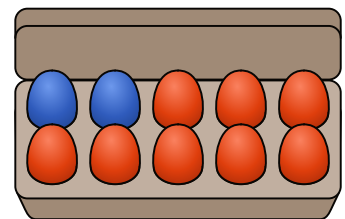
$$\underline{\quad} + \underline{\quad} = \underline{\quad}$$



$$\underline{\quad} + \underline{\quad} = \underline{\quad}$$



$$\underline{\quad} + \underline{\quad} = \underline{\quad}$$



$$\underline{\quad} + \underline{\quad} = \underline{\quad}$$